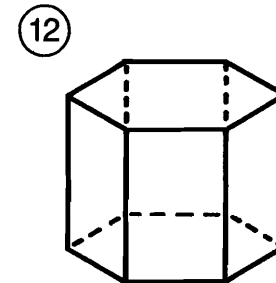
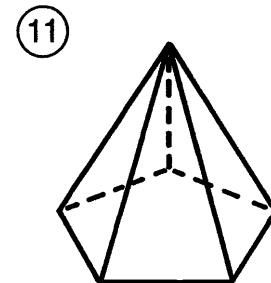
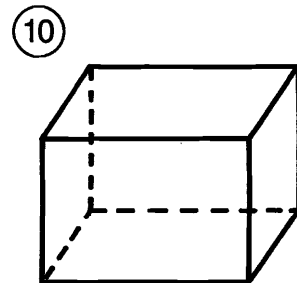
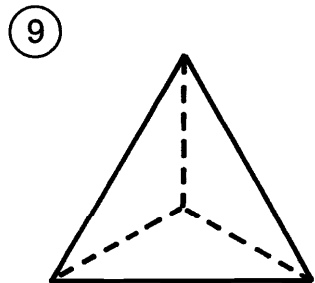
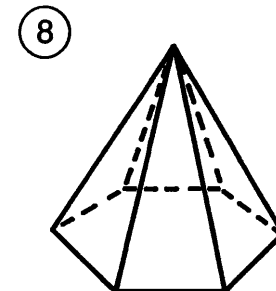
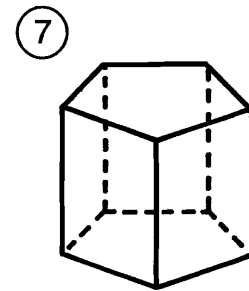
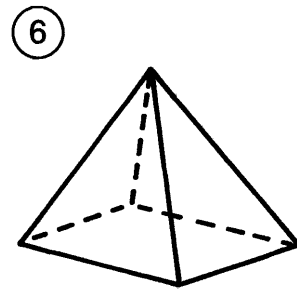
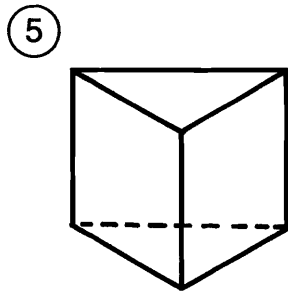
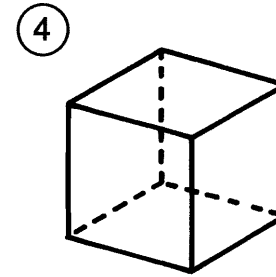
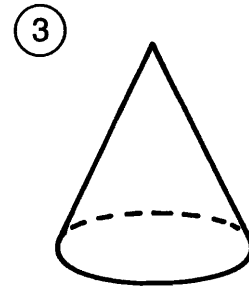
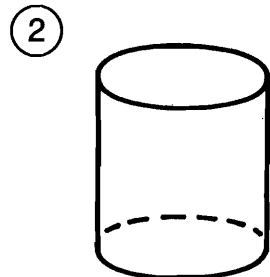
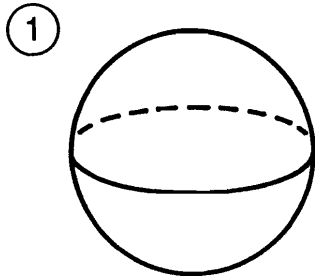


What Did the Taxi Driver Say About His Daughter?

Write the name that best describes the space figure. Then find your answer in the answer column. Write the letter of the answer in the box containing the number of the exercise.

6	4	9		2	1	1	5	7		10	1	12	8	3
---	---	---	--	---	---	---	---	---	--	----	---	----	---	---



- Ⓤ triangular pyramid
- Ⓣ hexagonal prism
- Ⓡ cone
- Ⓣ triangular prism
- ⓔ sphere
- Ⓜ rectangular prism
- Ⓞ pentagonal prism
- Ⓞ cube
- Ⓤ pentagonal pyramid
- Ⓡ cylinder
- ⓔ hexagonal pyramid
- Ⓨ rectangular pyramid